



Count the number of quarters (25¢), dimes(10¢), nickels(5¢) and pennies(1¢).

Answers

Ex)

Ex. 3 1 1 4

1)

1. _____

2)

2. _____

3)

3. _____

4)

4. _____

5)

5. _____

6)

6. _____

7)

7. _____

8)

8. _____

9)

9. _____

10)

10. _____



Count the number of quarters (25¢), dimes(10¢), nickels(5¢) and pennies(1¢).

Ex)

Answers

Ex.	<u>3</u>	<u>1</u>	<u>1</u>	<u>4</u>
-----	----------	----------	----------	----------

1)

1.	<u>1</u>	<u>3</u>	<u>2</u>	<u>3</u>
----	----------	----------	----------	----------

2)

2.	<u>3</u>	<u>2</u>	<u>2</u>	<u>2</u>
----	----------	----------	----------	----------

3)

3.	<u>3</u>	<u>4</u>	<u>1</u>	<u>1</u>
----	----------	----------	----------	----------

4)

4.	<u>2</u>	<u>3</u>	<u>2</u>	<u>2</u>
----	----------	----------	----------	----------

5)

5.	<u>2</u>	<u>3</u>	<u>2</u>	<u>2</u>
----	----------	----------	----------	----------

6)

6.	<u>3</u>	<u>1</u>	<u>2</u>	<u>3</u>
----	----------	----------	----------	----------

7)

7.	<u>2</u>	<u>2</u>	<u>3</u>	<u>2</u>
----	----------	----------	----------	----------

8)

8.	<u>2</u>	<u>2</u>	<u>3</u>	<u>2</u>
----	----------	----------	----------	----------

9)

9.	<u>2</u>	<u>3</u>	<u>2</u>	<u>2</u>
----	----------	----------	----------	----------

10)

10.	<u>2</u>	<u>2</u>	<u>2</u>	<u>3</u>
-----	----------	----------	----------	----------



Count the number of quarters (25¢), dimes(10¢), nickels(5¢) and pennies(1¢).


Ex)



Answers

Ex. 2 2 1 4

1)




1. _____

2)



2. _____

3)



3. _____

4)



4. _____

5)




5. _____

6)



6. _____

7)



7. _____

8)



8. _____

9)



9. _____

10)



10. _____



Count the number of quarters (25¢), dimes(10¢), nickels(5¢) and pennies(1¢).

Ex)

1)

2)

3)

4)

5)

6)

7)

8)

9)

10)

Answers

Ex.	<u>2</u>	<u>2</u>	<u>1</u>	<u>4</u>
1.	<u>2</u>	<u>3</u>	<u>2</u>	<u>2</u>
2.	<u>2</u>	<u>2</u>	<u>3</u>	<u>2</u>
3.	<u>3</u>	<u>2</u>	<u>1</u>	<u>3</u>
4.	<u>3</u>	<u>3</u>	<u>1</u>	<u>2</u>
5.	<u>2</u>	<u>2</u>	<u>2</u>	<u>3</u>
6.	<u>2</u>	<u>3</u>	<u>2</u>	<u>2</u>
7.	<u>3</u>	<u>1</u>	<u>1</u>	<u>4</u>
8.	<u>2</u>	<u>2</u>	<u>3</u>	<u>2</u>
9.	<u>2</u>	<u>3</u>	<u>1</u>	<u>3</u>
10.	<u>3</u>	<u>2</u>	<u>1</u>	<u>3</u>



Count the number of quarters (25¢), dimes(10¢), nickels(5¢) and pennies(1¢).

Ex)

Answers

Ex. 2 1 2 4

1)

1. _____

2. _____

2)

3. _____

4. _____

3)

5. _____

6. _____

4)

7. _____

8. _____

5)

9. _____

10. _____

6)

7)

8)

9)

10)



Count the number of quarters (25¢), dimes(10¢), nickels(5¢) and pennies(1¢).

Ex)

1)

2)

3)

4)

5)

6)

7)

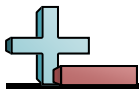
8)

9)

10)

Answers

Ex.	<u>2</u>	<u>1</u>	<u>2</u>	<u>4</u>
1.	<u>1</u>	<u>3</u>	<u>3</u>	<u>2</u>
2.	<u>2</u>	<u>1</u>	<u>4</u>	<u>2</u>
3.	<u>1</u>	<u>3</u>	<u>2</u>	<u>3</u>
4.	<u>2</u>	<u>4</u>	<u>2</u>	<u>1</u>
5.	<u>2</u>	<u>2</u>	<u>2</u>	<u>3</u>
6.	<u>3</u>	<u>2</u>	<u>2</u>	<u>2</u>
7.	<u>2</u>	<u>1</u>	<u>3</u>	<u>3</u>
8.	<u>2</u>	<u>2</u>	<u>1</u>	<u>4</u>
9.	<u>2</u>	<u>3</u>	<u>2</u>	<u>2</u>
10.	<u>2</u>	<u>3</u>	<u>2</u>	<u>2</u>



Count the number of quarters (25¢), dimes(10¢), nickels(5¢) and pennies(1¢).

Ex)

Answers
 Ex. 4 2 1 2

1)

1. _____

2)

2. _____

3)

3. _____

4)

4. _____

5)

5. _____

6)

6. _____

7)

7. _____

8)

8. _____

9)

9. _____

10)

10. _____



Count the number of quarters (25¢), dimes(10¢), nickels(5¢) and pennies(1¢).

Ex)

1)

2)

3)

4)

5)

6)

7)

8)

9)

10)

Answers

Ex.	<u>4</u>	<u>2</u>	<u>1</u>	<u>2</u>
1.	<u>2</u>	<u>2</u>	<u>3</u>	<u>2</u>
2.	<u>2</u>	<u>3</u>	<u>3</u>	<u>1</u>
3.	<u>1</u>	<u>3</u>	<u>2</u>	<u>3</u>
4.	<u>2</u>	<u>1</u>	<u>2</u>	<u>4</u>
5.	<u>4</u>	<u>1</u>	<u>2</u>	<u>2</u>
6.	<u>3</u>	<u>3</u>	<u>2</u>	<u>1</u>
7.	<u>3</u>	<u>4</u>	<u>1</u>	<u>1</u>
8.	<u>3</u>	<u>2</u>	<u>2</u>	<u>2</u>
9.	<u>2</u>	<u>3</u>	<u>1</u>	<u>3</u>
10.	<u>2</u>	<u>2</u>	<u>2</u>	<u>3</u>



Count the number of quarters (25¢), dimes(10¢), nickels(5¢) and pennies(1¢).

Ex)



Ex. 3 2 1 3



1. _____



2. _____



3. _____




4. _____



5. _____



6. _____



7. _____



8. _____



9. _____



10. _____

Answers



Count the number of quarters (25¢), dimes(10¢), nickels(5¢) and pennies(1¢).

Ex)

1)

2)

3)

4)

5)

6)

7)

8)

9)

10)

Answers

Ex.	<u>3</u>	<u>2</u>	<u>1</u>	<u>3</u>
1.	<u>3</u>	<u>2</u>	<u>2</u>	<u>2</u>
2.	<u>3</u>	<u>2</u>	<u>2</u>	<u>2</u>
3.	<u>2</u>	<u>4</u>	<u>2</u>	<u>1</u>
4.	<u>2</u>	<u>2</u>	<u>3</u>	<u>2</u>
5.	<u>1</u>	<u>3</u>	<u>2</u>	<u>3</u>
6.	<u>2</u>	<u>4</u>	<u>2</u>	<u>1</u>
7.	<u>2</u>	<u>2</u>	<u>2</u>	<u>3</u>
8.	<u>5</u>	<u>2</u>	<u>1</u>	<u>1</u>
9.	<u>2</u>	<u>2</u>	<u>3</u>	<u>2</u>
10.	<u>3</u>	<u>3</u>	<u>2</u>	<u>1</u>



Count the number of quarters (25¢), dimes(10¢), nickels(5¢) and pennies(1¢).

Answers

Ex)

Ex. 3 1 3 2

1)

1. _____

2)

2. _____

3)

3. _____

4)

4. _____

5)

5. _____

6)

6. _____

7)

7. _____

8)

8. _____

9)

9. _____

10)

10. _____



Count the number of quarters (25¢), dimes(10¢), nickels(5¢) and pennies(1¢).

Ex)

1)

2)

3)

4)

5)

6)

7)

8)

9)

10)

Answers

Ex.	<u>3</u>	<u>1</u>	<u>3</u>	<u>2</u>
1.	<u>2</u>	<u>2</u>	<u>3</u>	<u>2</u>
2.	<u>2</u>	<u>4</u>	<u>2</u>	<u>1</u>
3.	<u>2</u>	<u>2</u>	<u>2</u>	<u>3</u>
4.	<u>3</u>	<u>1</u>	<u>2</u>	<u>3</u>
5.	<u>2</u>	<u>4</u>	<u>1</u>	<u>2</u>
6.	<u>1</u>	<u>1</u>	<u>4</u>	<u>3</u>
7.	<u>3</u>	<u>1</u>	<u>2</u>	<u>3</u>
8.	<u>3</u>	<u>1</u>	<u>2</u>	<u>3</u>
9.	<u>2</u>	<u>2</u>	<u>3</u>	<u>2</u>
10.	<u>1</u>	<u>3</u>	<u>2</u>	<u>3</u>



Count the number of quarters (25¢), dimes(10¢), nickels(5¢) and pennies(1¢).

Ex)



Answers

Ex. 1 3 2 3

1)




1. _____

2)



2. _____

3)



3. _____

4)



4. _____

5)



5. _____

6)



6. _____

7)



7. _____

8)



8. _____

9)



9. _____

10)



10. _____



Count the number of quarters (25¢), dimes(10¢), nickels(5¢) and pennies(1¢).

Ex)

1)

2)

3)

4)

5)

6)

7)

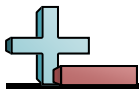
8)

9)

10)

Answers

Ex.	<u>1</u>	<u>3</u>	<u>2</u>	<u>3</u>
1.	<u>3</u>	<u>3</u>	<u>1</u>	<u>2</u>
2.	<u>1</u>	<u>4</u>	<u>2</u>	<u>2</u>
3.	<u>1</u>	<u>2</u>	<u>5</u>	<u>1</u>
4.	<u>3</u>	<u>2</u>	<u>2</u>	<u>2</u>
5.	<u>3</u>	<u>2</u>	<u>2</u>	<u>2</u>
6.	<u>1</u>	<u>4</u>	<u>3</u>	<u>1</u>
7.	<u>2</u>	<u>3</u>	<u>3</u>	<u>1</u>
8.	<u>5</u>	<u>2</u>	<u>1</u>	<u>1</u>
9.	<u>2</u>	<u>2</u>	<u>3</u>	<u>2</u>
10.	<u>2</u>	<u>2</u>	<u>2</u>	<u>3</u>



Count the number of quarters (25¢), dimes(10¢), nickels(5¢) and pennies(1¢).

Ex)

Answers

Ex. 2 3 1 3

1)

1. _____

2)

2. _____

3)

3. _____

4)

4. _____

5)

5. _____

6)

6. _____

7)

7. _____

8)

8. _____

9)

9. _____

10)

10. _____



Count the number of quarters (25¢), dimes(10¢), nickels(5¢) and pennies(1¢).

Ex)

1)

2)

3)

4)

5)

6)

7)

8)

9)

10)

Answers

Ex.	<u>2</u>	<u>3</u>	<u>1</u>	<u>3</u>
1.	<u>1</u>	<u>2</u>	<u>3</u>	<u>3</u>
2.	<u>2</u>	<u>2</u>	<u>2</u>	<u>3</u>
3.	<u>3</u>	<u>2</u>	<u>3</u>	<u>1</u>
4.	<u>4</u>	<u>2</u>	<u>2</u>	<u>1</u>
5.	<u>3</u>	<u>2</u>	<u>1</u>	<u>3</u>
6.	<u>3</u>	<u>3</u>	<u>1</u>	<u>2</u>
7.	<u>2</u>	<u>3</u>	<u>2</u>	<u>2</u>
8.	<u>3</u>	<u>2</u>	<u>2</u>	<u>2</u>
9.	<u>2</u>	<u>3</u>	<u>3</u>	<u>1</u>
10.	<u>3</u>	<u>4</u>	<u>1</u>	<u>1</u>



Count the number of quarters (25¢), dimes(10¢), nickels(5¢) and pennies(1¢).

Ex)

Answers

Ex. 3 1 3 2

1)

1. _____

2)

2. _____

3)

3. _____

4)

4. _____

5)

5. _____

6)

6. _____

7)

7. _____

8)

8. _____

9)

9. _____

10)

10. _____



Count the number of quarters (25¢), dimes(10¢), nickels(5¢) and pennies(1¢).

Ex)

1)

2)

3)

4)

5)

6)

7)

8)

9)

10)

Answers

Ex.	<u>3</u>	<u>1</u>	<u>3</u>	<u>2</u>
1.	<u>3</u>	<u>2</u>	<u>1</u>	<u>3</u>
2.	<u>2</u>	<u>2</u>	<u>2</u>	<u>3</u>
3.	<u>2</u>	<u>2</u>	<u>4</u>	<u>1</u>
4.	<u>2</u>	<u>3</u>	<u>3</u>	<u>1</u>
5.	<u>2</u>	<u>2</u>	<u>3</u>	<u>2</u>
6.	<u>2</u>	<u>2</u>	<u>2</u>	<u>3</u>
7.	<u>2</u>	<u>2</u>	<u>2</u>	<u>3</u>
8.	<u>1</u>	<u>3</u>	<u>3</u>	<u>2</u>
9.	<u>2</u>	<u>1</u>	<u>4</u>	<u>2</u>
10.	<u>1</u>	<u>2</u>	<u>2</u>	<u>4</u>



Count the number of quarters (25¢), dimes(10¢), nickels(5¢) and pennies(1¢).

Answers



Ex. 3 2 2 2



1. _____



2. _____



3. _____



4. _____



5. _____



6. _____



7. _____



8. _____



9. _____



10. _____



Count the number of quarters (25¢), dimes(10¢), nickels(5¢) and pennies(1¢).

Ex)



Ex.

3 2 2 2

1)



1.

3 2 3 1

2)



2.

2 3 1 3

3)



3.

2 2 3 2

4)



4.

3 3 2 1

5)



5.

3 1 2 3

6)



6.

2 4 2 1

7)



7.

2 2 3 2

8)



8.

2 1 3 3


9)



9.

1 3 2 3

10)



10.

3 1 3 2

Answers